

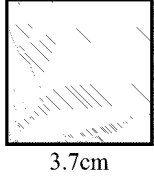
Time: 10 Minutes	Paper Math 6 (T-1)	Total Marks: 10
4th Month, 1st Week, 1st Day	Exercise 8.1 Q # (1, 2)	

☆ Answer the following questions: درج ذیل سوالات کے جواب دیں۔

Q.1. Find the perimeter of the following shapes. (2.5x2=5)

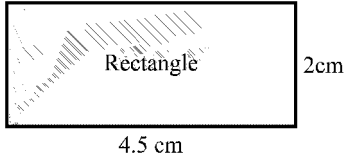
درج ذیل اشکال کا احاطہ معلوم کریں۔

(i)



3.7cm

(ii)

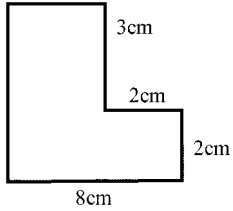


4.5 cm

Q.2. Find the area perimeter of the following shapes. (2.5x2=5)

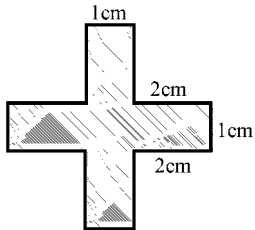
درج ذیل اشکال کا رقبہ اور احاطہ معلوم کریں۔

(i)



8cm

(ii)



2cm


Time: 10 Minutes	Paper Math 6 (T-1)	Total Marks: 10
4th Month, 1st Week, 1st Day	Exercise 8.1 Q # (1, 2)	

☆ Answer the following questions: درج ذیل سوالات کے جواب دیں۔

Q.1. Find the perimeter of the following shapes. (2.5x2=5)

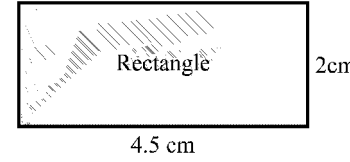
درج ذیل اشکال کا احاطہ معلوم کریں۔

(i)



3.7cm

(ii)

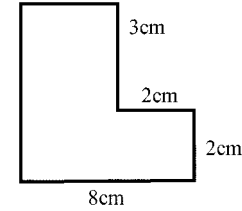


4.5 cm

Q.2. Find the area perimeter of the following shapes. (2.5x2=5)

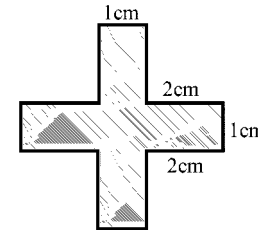
درج ذیل اشکال کا رقبہ اور احاطہ معلوم کریں۔

(i)



8cm

(ii)



2cm